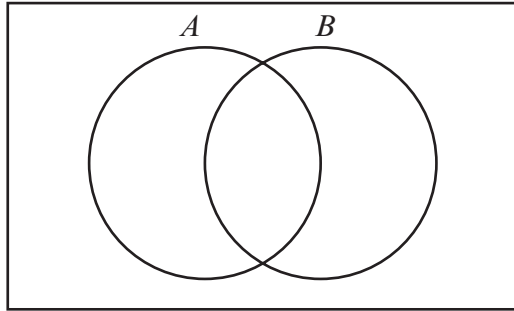


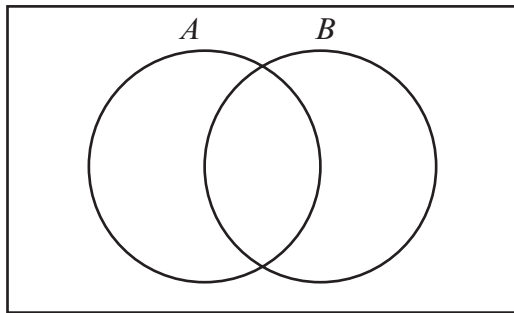
14. On each Venn diagram, shade the appropriate region to represent the information given in each part of the question.

(a)  $A \cap B$



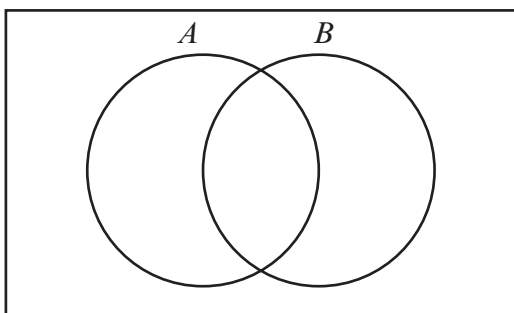
[1]

(b)  $(A \cup B)'$



[1]

(c)  $A \cup B'$



[1]